



INDIAN SCHOOL AL WADI AL KABIR  
DEPARTMENT OF MATHEMATICS (2023 – 2024)

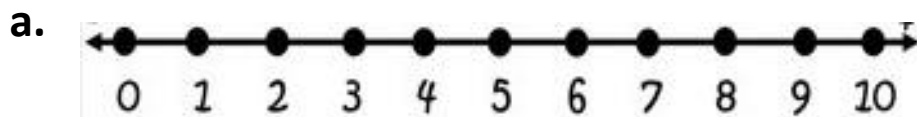
TOPIC: SUBTRACTION

Worksheet - 1

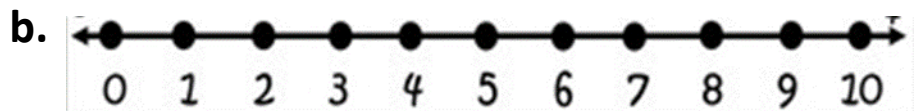
RESOURCE PERSON: Mrs. Sirisha

NAME: \_\_\_\_\_ CLASS: I SEC: \_\_\_ DATE: \_\_\_\_\_

Subtract on the number line (0 – 10)

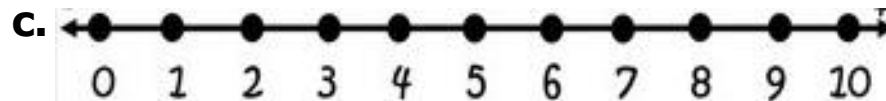


$$\boxed{5} - \boxed{2} = \boxed{\phantom{00}}$$

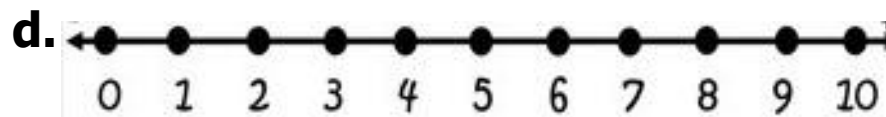


$$\boxed{7} - \boxed{1} = \boxed{\phantom{00}}$$

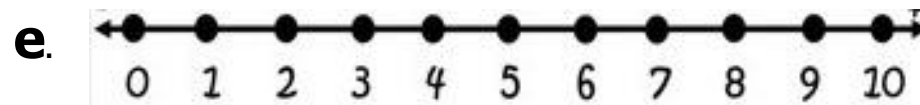
CHECKED BY: ACADEMIC COORDINATOR – CLASS - I  
ISWK/DEPARTMENT OF MATHEMATICS /2023-2024



$$\boxed{8} - \boxed{3} = \boxed{\phantom{00}}$$



$$\boxed{6} - \boxed{4} = \boxed{\phantom{00}}$$



$$\boxed{9} - \boxed{5} = \boxed{\phantom{00}}$$

CHECKED BY: ACADEMIC COORDINATOR – CLASS - I  
ISWK/DEPARTMENT OF MATHEMATICS /2023-2024

